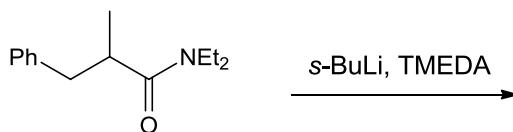
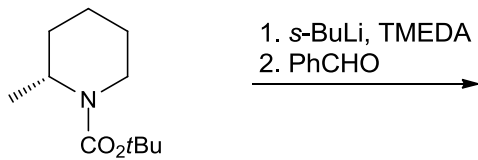
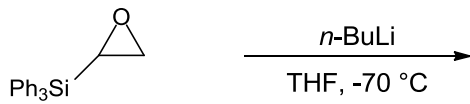
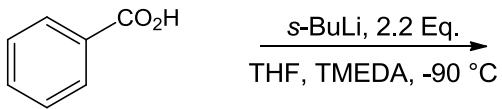
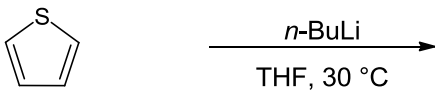
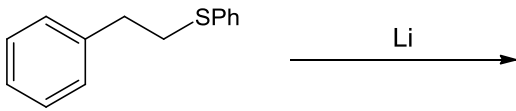



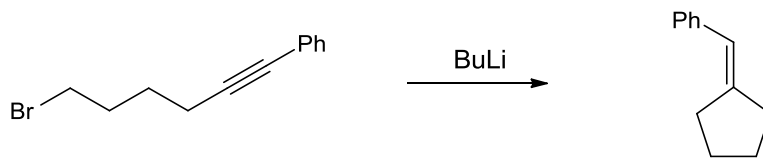
Seminar zur Vorlesung Organische Chemie 5. FS

Übungsblatt Nr. 2

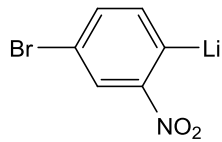
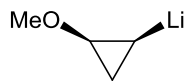
1. Vervollständigen Sie die Reaktionsgleichungen



2. Erklären Sie folgenden Befund:



3. Zeigen Sie geeignete Vorläufer für folgende Organolithiumverbindungen:



4. Welche Organolithiumverbindungen entstehen?

